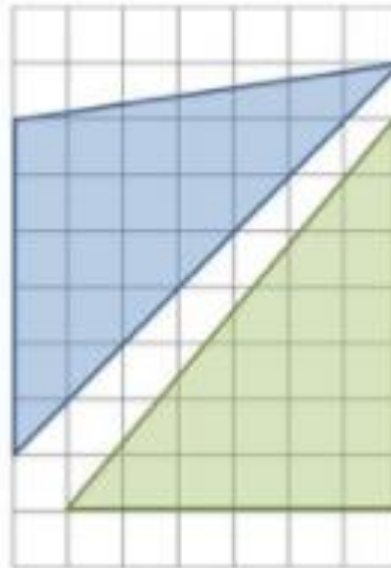


# Good Morning!

Please solve this...

- 3** Two triangles are drawn on a centimetre square grid.  
The triangles have the same area.  
True or false? Prove it.



Handwriting time

Mesmerising

Delirious


incredible

Wonderful



# Performance Poetry!

Be brave – have a go!



Monday

# When you are performing remember:

- Volume
- Pace
- Pauses
- Expression
- Different voices
- Background sounds
- Body positions




Monday

Let's have a go

**My Baby Sister**

My baby sister's  
really swell.


I love her smile,  
but not her smell.



Monday

# Now try this poem by Bruce Lansky

- **I'd Rather**
- I'd rather wash the dishes  
I'd rather kiss a frog.  
I'd rather get an F in maths  
or run a ten-mile jog.
- I'd rather do my homework.  
I'd rather mow the lawn.  
I'd rather take the garbage out.  
I'd rather wake at dawn.
- I'd rather dine on Brussels sprouts  
or catch the chicken pox.  
I'd rather do most anything  
than clean the litter box.



Say it loud and proud – practise it in the mirror if you can!

# Good Morning!

Please solve this...

2 Emma has 3 tins of paint.



Each tin contains 5 litres of paint.

Emma uses 7 litres of paint.

How many litres of paint does Emma have left?

# Spelling Time!

- Please ask someone to test you on last week's spellings then learn these:

interest

experiment

potatoes

favourite

imagine

material

promise

opposite



minute

increase



# Take another look at this poem by Bruce Lansky

- **I'd Rather**
- I'd rather wash the dishes  
I'd rather kiss a frog.  
I'd rather get an F in maths  
or run a ten-mile jog.
- I'd rather do my homework.  
I'd rather mow the lawn.  
I'd rather take the garbage out.  
I'd rather wake at dawn.
- I'd rather dine on Brussels sprouts  
or catch the chicken pox.  
I'd rather do most anything  
than clean the litter box.




Tuesday

# Can you prepare a poem to perform?

Think of something you would rather not do and the different things you would rather do instead.

Write them down and then perform using:

- Volume
- Pace
- Pauses
- Expression
- Different voices
- Background sounds
- Body positions



# Good Morning!

Please solve this...

- 1 Mo and his four friends eat a meal.  
They each pay for part of the meal.  
Mo pays £5.20  
Each of his friends pay £3.80  
How much did the meal cost in total?

# Please have a go at these..

## Year 4 Summer Term 2 Mat 1 SPaG Mat

1

**a** Add the correct pronouns to the sentence:

Rita heard a grunting noise from inside the cave, which made \_\_\_\_\_ shudder. There was definitely something inside \_\_\_\_\_



**c** Circle the THREE determiners in this sentence.

The two dogs barked at a cat.



**e** Change these adjectives into adverbs.

sleepy - \_\_\_\_\_

messy - \_\_\_\_\_

simple - \_\_\_\_\_

**b** Look at the choices of words within the brackets. Circle the correct word to fit the sentence:

(They/There) was a sudden rainstorm so the children ran inside for (their/there) coats. They decided that they might need umbrellas (two/to/too).

**d** Mr Whoops has accidentally jumbled two adjectives that he uses to describe his favourite teacher. Can you help him to unjumble them?

rgican

yldreifn



**f** Re-arrange this sentence so that it has a fronted adverbial. Don't forget the correct punctuation.

The children made a gigantic sandcastle with much enthusiasm.



Wednesday

# What's So Funny?

*By Bruce Lansky*

There's something no one's telling  
me.

There's something I don't know.  
I notice people staring at me  
everywhere I go.

I ask my friends to clue me in;  
not knowing is distressing.  
But no one says a single word;  
I find that quite depressing.

They point at me and giggle.  
They point at me and grin.  
I'll have to find out just what kind  
of trouble I am in.

I check the bathroom mirror  
to learn the awful truth.  
I find a piece of lettuce  
sticking on my front tooth.

I rinse the yucky green away.  
I think that is the end.  
But then I hear more giggling--  
it comes from my best friend.

I tell him, "Jack, please help me out,  
I'm feeling kind of blue."  
He says, "You've got some toilet paper  
sticking to your shoe!"


Wednesday

# Can you prepare a poem to perform?

Can you write your version of  
'What's So Funny?'

Write it down and then perform using

- Volume
- Pace
- Pauses
- Expression
- Different voices
- Background sounds
- Body positions



# Good Morning!

Please solve this...

3 A fish tank holds 30 litres of water.



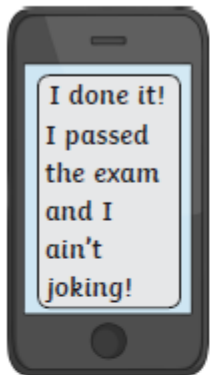
The fish tank is  $\frac{3}{5}$  full.

How much more water is needed to fill the tank?

# Please have a go at these..

## Year 4 Summer Term 2 SPaG Mat

2



**a**  
Re-write this text message using Standard English.

**c**  
Can you tell me your symptoms, Mr Brown?



Can you write this as a line of accurately punctuated direct speech?

**e**  
These words have prepositions hiding within them can you spot them? The first one is done for you!

toffee → t(off)ee → off

hoverboard → \_\_\_\_\_ → \_\_\_\_\_

supply → \_\_\_\_\_ → \_\_\_\_\_

**b**  
Can you think of the prefix words to match these definitions?

A signature of a famous person: auto \_\_\_\_\_

An adjective to describe someone who hates waiting: im \_\_\_\_\_

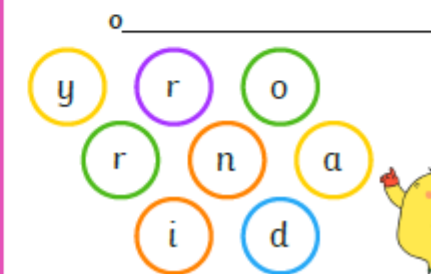
**d**  
Use the correct form of the verb 'to be' to complete these past and present tense sentences correctly:

This \_\_\_\_\_ your new classroom.

Yesterday, we \_\_\_\_\_ on a school trip.

Joe and Jack \_\_\_\_\_ twins.

**f**  
Mr Whoops has been juggling with the letters from one of his Y4 spelling words. Can you spot what it is?





Thursday

# Michael Rosen - Chocolate Cake

- <https://www.bbc.co.uk/bitesize/clips/zh43cdm>
- Watch and listen to Michael Rosen read his poem about chocolate cake.
- Can you write a poem about your favourite food?
- Can you perform this poem?
- What sound effects or actions could you include to make your poem entertaining to watch and listen to?

# Good Morning!

Please solve this...

3 A fish tank holds 30 litres of water.



The fish tank is  $\frac{3}{5}$  full.

How much more water is needed to fill the tank?

Performance time!

